


DOMINO Fact Families



To Prepare:

*Copy pages 2-3 of download (front and back) for students

*Remove all the dominoes from your set that contain doubles (such as 6/6 or 3/3)

To Play:

*Students select a domino, fill in the dots, write the three numbers, and use those three numbers to write number facts for that fact family. See example below.

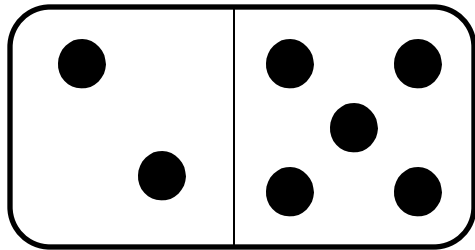
2 5 7

total altogether

$$\begin{array}{r} 2 \\ \hline \end{array} + \begin{array}{r} 5 \\ \hline \end{array} = \begin{array}{r} 7 \\ \hline \end{array}$$
$$\begin{array}{r} 5 \\ \hline \end{array} + \begin{array}{r} 2 \\ \hline \end{array} = \begin{array}{r} 7 \\ \hline \end{array}$$
$$\begin{array}{r} 7 \\ \hline \end{array} - \begin{array}{r} 5 \\ \hline \end{array} = \begin{array}{r} 2 \\ \hline \end{array}$$
$$\begin{array}{r} 7 \\ \hline \end{array} - \begin{array}{r} 2 \\ \hline \end{array} = \begin{array}{r} 5 \\ \hline \end{array}$$

Name _____

Domino Fact Families




2 5 7

$$\underline{2} + \underline{5} = \underline{7}$$

$$\underline{5} + \underline{2} = \underline{7}$$

$$\underline{7} - \underline{5} = \underline{2}$$

$$\underline{7} - \underline{2} = \underline{5}$$




$$\underline{\quad} + \underline{\quad} = \underline{\quad}$$

$$\underline{\quad} + \underline{\quad} = \underline{\quad}$$

$$\underline{\quad} - \underline{\quad} = \underline{\quad}$$

$$\underline{\quad} - \underline{\quad} = \underline{\quad}$$




$$\underline{\quad} + \underline{\quad} = \underline{\quad}$$

$$\underline{\quad} + \underline{\quad} = \underline{\quad}$$

$$\underline{\quad} - \underline{\quad} = \underline{\quad}$$

$$\underline{\quad} - \underline{\quad} = \underline{\quad}$$





$$\underline{\quad} + \underline{\quad} = \underline{\quad}$$

$$\underline{\quad} + \underline{\quad} = \underline{\quad}$$

$$\underline{\quad} - \underline{\quad} = \underline{\quad}$$

$$\underline{\quad} - \underline{\quad} = \underline{\quad}$$



_____ + _____ = _____

_____ + _____ = _____

_____ - _____ = _____



_____ - _____ = _____

_____ + _____ = _____

_____ + _____ = _____

_____ - _____ = _____

_____ - _____ = _____



_____ + _____ = _____

_____ + _____ = _____

_____ - _____ = _____

_____ - _____ = _____

_____ + _____ = _____

_____ + _____ = _____

_____ - _____ = _____

_____ - _____ = _____