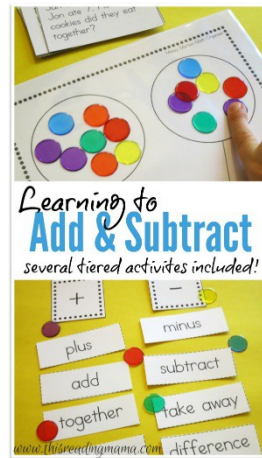


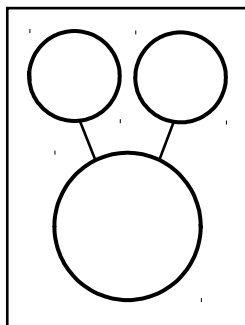
# Mickey Martian Addition and Subtraction

## Included in the Pack:

- Mickey Martian organizer
- Addition Cards
- Subtraction Cards
- Addition Word Problems (to 10 & over 10)
- Subtraction Word Problems (to 10 & over 10)
- Addition Recording Sheet
- Subtraction Recording Sheet
- Addition and Subtraction Vocabulary Sort

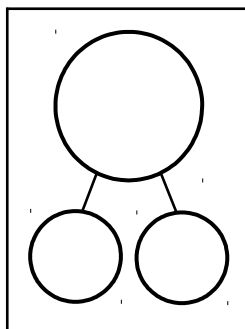


Click [HERE](#) to see this printable in action!



### Addition:


Place objects needed for the addition problem in the ears. Pull them together into the head. Then ask the child to count them altogether.

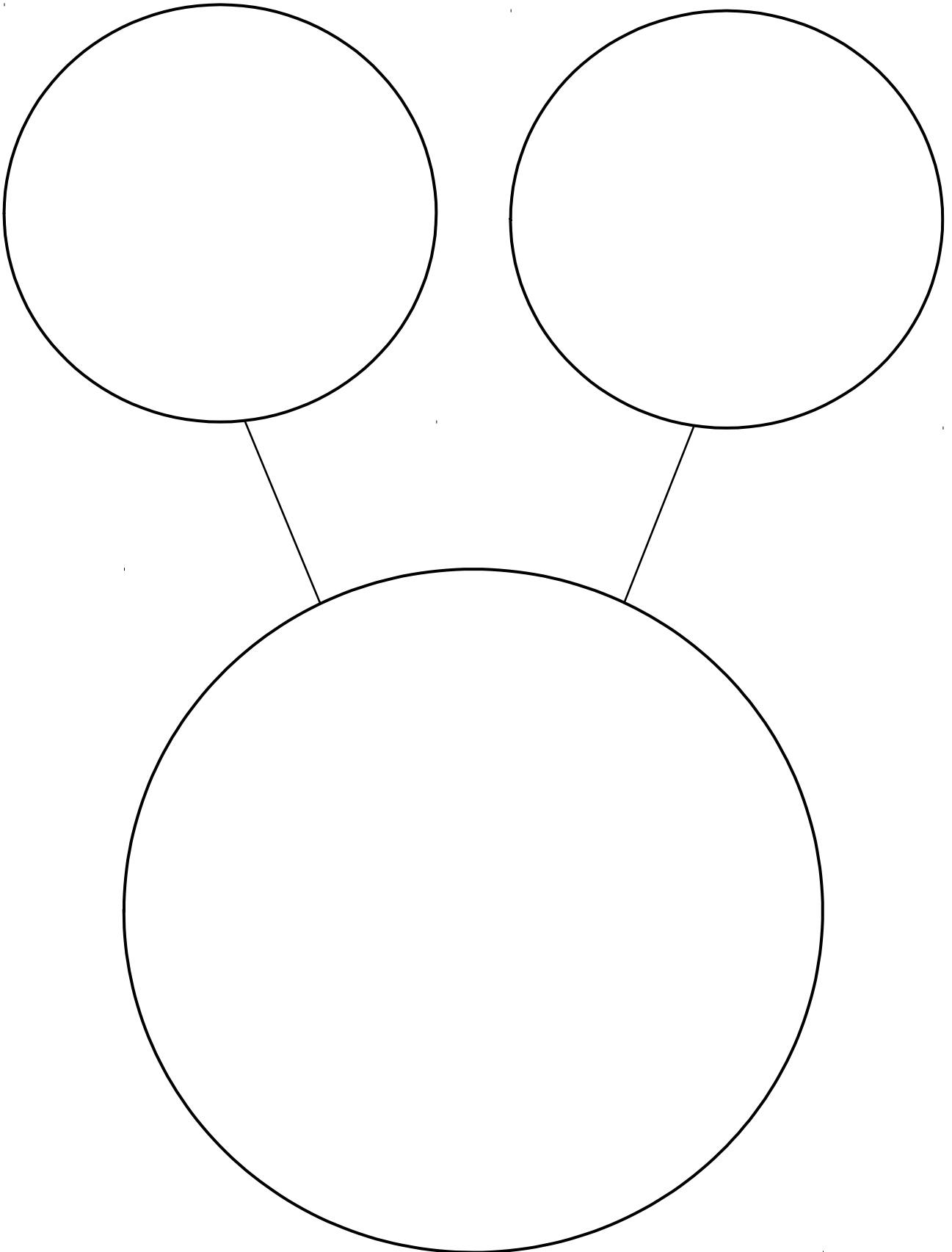


### Subtraction:

Place objects needed for the subtraction problem in the head. The child pulls away or takes away objects and places them into one of the ears. What is left can be pulled into the other ear or counted in the head.

**Terms of Use:** This free printable was created for you to use at home with your child/students or with multiple children in a classroom/tutoring setting. Please **do not** sell, host, reproduce, giveaway, or store on any other site (including a blog, Facebook, 4Shared, Dropbox, etc.). Thank you!





These addition sentences match the word problems on pp. 5-6 of the download.

Addition to 10	$2 + 4$	$5 + 3$
$3 + 4$	$5 + 5$	$6 + 2$
$3 + 1$	$5 + 4$	$2 + 5$
Addition over 10	$10 + 4$	$9 + 8$
$7 + 5$	$4 + 7$	$11 + 6$
$12 + 4$	$10 + 5$	$8 + 7$

These subtraction sentences match the word problems on pp. 7-8 of the download.

Subtraction to 10

$4 - 1$

$6 - 4$

$9 - 2$

$7 - 4$

$10 - 4$

$5 - 1$

$8 - 3$

$3 - 1$

Subtraction over 10

$13 - 5$

$12 - 6$

$14 - 8$

$12 - 7$

$17 - 6$

$18 - 9$

$15 - 10$

$11 - 3$

Nick has 2 cars and Kim has 4. How many cars do they have all together?

Kate was given 5 books. Then she was given 3 more. How many does she have now?

James saw 3 dogs. Then he saw 4 more. How many dogs did James see?

Dot drew 5 pictures for her mom before school. She drew her mom 5 more pictures after school. If Dot gave her mom all the pictures, how many pictures did her mom get?

Mel saw 6 cows that were standing and 2 cows that were lying down. How many cows did Mel see in all?

Tom drank 3 cups of milk at breakfast and 1 at snack. How many cups of milk did Tom drink?

Ted lost 5 balls in the woods. Then he lost 4 more. How many balls did Ted lose?

Jan ate 2 cookies. Jon ate 5. How many cookies did they eat together?

Nick has 10 cars and Kim has 4. How many cars do they have all together?

Kate was given 9 books. Then she was given 8 more. How many does she have now?

James saw 7 dogs. Then he saw 5 more. How many dogs did James see?

Dot drew 4 pictures for her mom before school. She drew her mom 7 more pictures after school. If Dot gave her mom all the pictures, how many pictures did her mom get?

Mel saw 11 cows that were standing and 6 cows that were lying down. How many cows did Mel see in all?

Tom got 12 gumballs at the store and 4 more at home. How many gumballs does Tom have now?

Ted lost 10 balls in the woods. Then he lost 5 more balls. How many balls did Ted lose?

Jan ate 8 little cookies. Jon ate 7. How many cookies did they eat together?

Nick has 4 cars and Kim took away 1. How many cars does Nick have now?

Kate was given 6 books, but she lost 4. How many books does Kate have left?

James saw 9 dogs. 2 dogs ran away. How many dogs does James see now?

Dot drew 7 pictures for her mom before school. She took them to school and gave 4 to her friend. If Dot gave her mom the rest of the pictures, how many did her mom get?

Mel saw 10 cows in the field. If 4 were lying down, how many were standing up?

Tom was given 5 gumballs today. He has already chewed 1. How many gumballs does he have left?

Ted lost 8 balls in the woods. If he found 3, how many were still lost?

Jan's dad gave her 3 cookies, but 1 dropped on the floor and the dog ate it. How many cookies did Jan eat?

Nick has 13 cars and Kim took away 5. How many cars does Nick have now?

Kate was given 12 books, but she lost 6. How many books does Kate have left?

James saw 14 dogs. 8 dogs ran away. How many dogs does James see now?

Dot drew 12 pictures for her mom before school. She took them to school and gave 7 to her friends. If Dot gave her mom the rest of the pictures, how many did her mom get?

Mel saw 17 cows in the field. If 6 were lying down, how many were standing up?

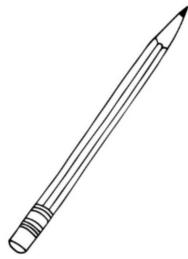
It takes 18 gumballs to fill Tom's gumball machine. If he has put in 9 gumballs, how many more gumballs can he put in before his machine is full?

Ted lost 15 balls in the woods. If he found 10, how many were still lost?

Jan's dad gave her 11 little cookies, but 3 dropped on the floor and the dog ate them. How many cookies did Jan eat?

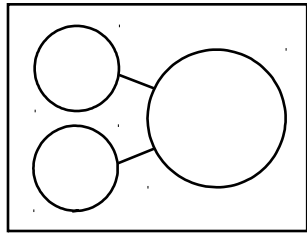


Write the addition number sentence from Mickey Martian.

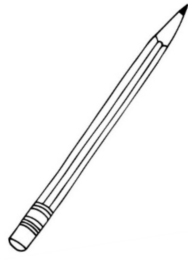


+

=



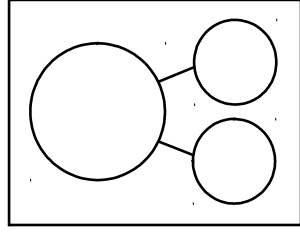
Write the subtraction number sentence from Mickey Martian.

A large, empty rectangular box with a solid black border, intended for writing the first number of a subtraction sentence.

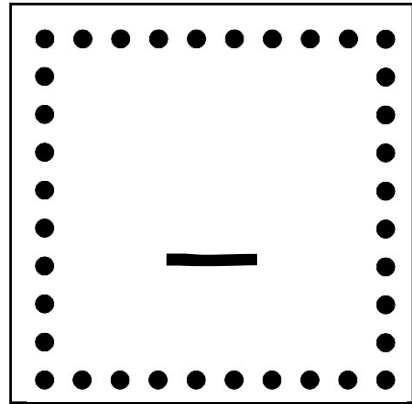

-

A large, empty rectangular box with a solid black border, intended for writing the second number of a subtraction sentence.

=

A large, empty rectangular box with a solid black border, intended for writing the result of the subtraction.

Directions: Cut apart and sort the words under + or -.



minus	add
sum	together
plus	difference
take away	subtract
many more	more