

# Pattern Block Graph & Tally


to use with ANY Pattern Block Mat!

- **Pattern Block Graphing** – Once a pattern block mat has been covered with pattern blocks, learners can use the graph (pg. 2/3 of download) to record how many they used of each block.
- Use the Graph Recording Sheet to answer questions about each graph.
- **Pattern Block Tally**- Print off 3-5 pattern block mats of choice (see the resource list in [my post](#)).
- Label each mat you print as *Mat 1*, *Mat 2*, *Mat 3*, and so on to *Mat 5* so the learner knows which mat is which.
- After each mat is completed, learners write down how many of each shape they have used on that particular mat on the tally graph page. In this download are tally graphs for 3, 4, or 5 Pattern Block Mats, in black/white and in color, found on pp. 6-11.
- Once the tally graph is complete for all mats, help the learner answer the questions about them on the Tally Recording Sheet (pp. 12-15).

## Let's Connect!

Blog: [www.thisreadingmama.com](http://www.thisreadingmama.com)  
Subscribe to my Newsletter: [HERE](#)  
Facebook: [/thisreadingmama](#)  
Pinterest: [/thisreadingmama](#)  
Twitter: [@thisreadingmama](#)  
TpT: [/This-Reading-Mama](#)  
Email: [becky@thisreadingmama.com](mailto:becky@thisreadingmama.com)

See this pack in action @  
[THIS READING MAMA](#)



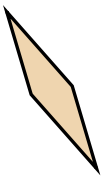



**Please Abide by the Terms of Use:** This free printable was created for you to use at home with your child/students or with multiple children in a classroom/tutoring setting. Please **do not** share between teachers, sell, host, reproduce, giveaway, or store on any other site (including a blog, Facebook, 4Shared, Dropbox, etc.). Thank you!

©All Rights Reserved.  
[www.thisreadingmama.com](http://www.thisreadingmama.com)

Show how many blocks you used on your mat in this graph.

Number of Pattern Blocks Used

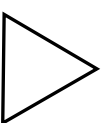
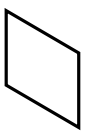
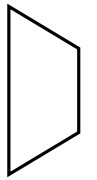
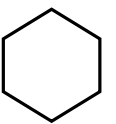

10						
9						
8						
7						
6						
5						
4						
3						
2						
1						



Show how many blocks you used on your mat in this graph.

Number of Pattern Blocks Used

10						
9						
8						
7						
6						
5						
4						
3						
2						
1						



# Graph Recording Sheet

How many  did you use? \_\_\_\_\_

How many  did you use? \_\_\_\_\_

How many  did you use? \_\_\_\_\_

How many  did you use? \_\_\_\_\_

How many  did you use? \_\_\_\_\_

How many  did you use? \_\_\_\_\_

Which shape did you use the MOST?  
Draw it in the box.

Which shape did you use the LEAST?  
Draw it in the box.

How many of your shapes are NOT  ? \_\_\_\_\_

# Graph Recording Sheet

How many  did you use? \_\_\_\_\_

How many  did you use? \_\_\_\_\_


How many  did you use? \_\_\_\_\_

How many  did you use? \_\_\_\_\_


How many  did you use? \_\_\_\_\_

How many  did you use? \_\_\_\_\_

Which shape did you use the MOST?  
Draw it in the box.


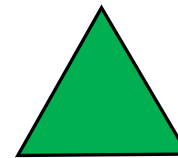




Which shape did you use the LEAST?  
Draw it in the box.



How many of your shapes are NOT  ? \_\_\_\_\_

How many did you use? Show with numbers or tally marks.


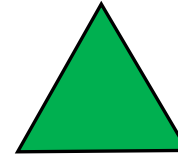




Mat 1

Mat 2

Mat 3

How many did you use? Show with numbers or tally marks.




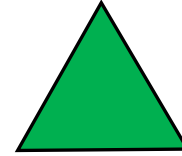


Mat 1

Mat 2

Mat 3

Mat 4

How many did you use? Show with numbers or tally marks.



Mat 1

Mat 2


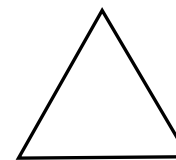
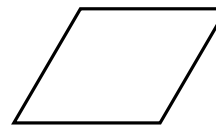
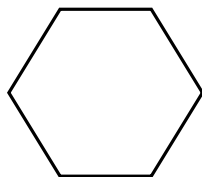

Mat 3

Mat 4

Mat 5



How many did you use? Show with numbers or tally marks.

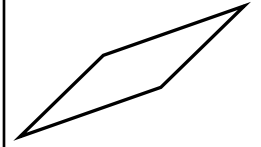
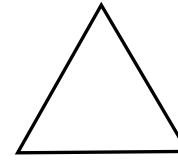
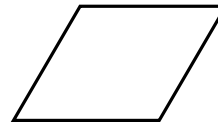
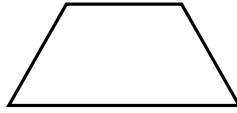
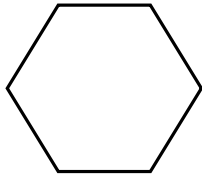



Mat 1

Mat 2

Mat 3

How many did you use? Show with numbers or tally marks.



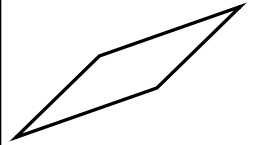
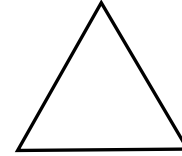
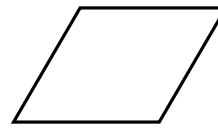
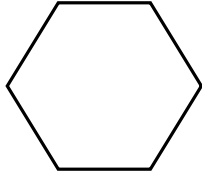

Mat 1

Mat 2

Mat 3

Mat 4

How many did you use? Show with numbers or tally marks.



Mat 1


Mat 2

Mat 3

Mat 4

Mat 5


Which mat had the most



?

---

Which mat had the most



?

---

Which mat had the most



?

---


Which mat had the most



?

---


Which mat had the most



?

---


Which mat had the most



?

---


Which mat had the least



?

---

Which mat had the least



?

---

Which mat had the least



?

---


Which mat had the least



?

---


Which mat had the least



?


---

Which mat had the least

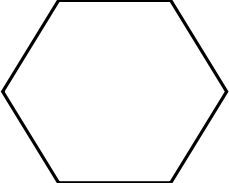


?

---

Which mat had the **most**  ?

\_\_\_\_\_

Which mat had the **most**  ?

\_\_\_\_\_

Which mat had the **most**  ?

\_\_\_\_\_

Which mat had the **most**  ?


\_\_\_\_\_

Which mat had the **most**  ?

\_\_\_\_\_

Which mat had the **most**  ?

\_\_\_\_\_

Which mat had the **least**  ?

---

Which mat had the **least**  ?

---

Which mat had the **least**  ?

---

Which mat had the **least**  ?

---

Which mat had the **least**  ?

---

Which mat had the **least**  ?

---