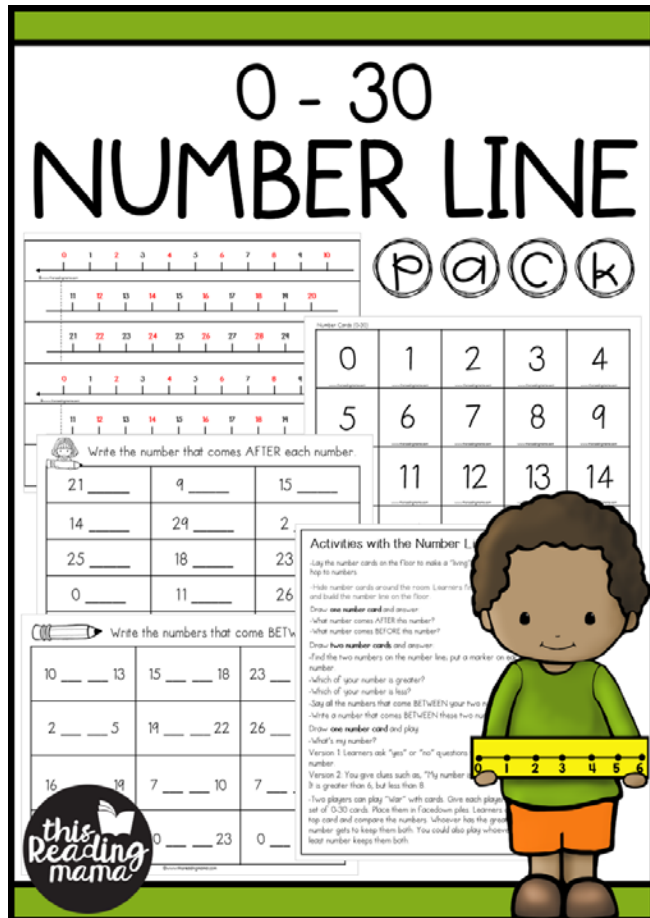


0 - 30 Number Line Pack



Read the post!

<https://thisreadingmama.com/0-30-number-line-activities-pack/>

Work on number concepts from 0-30 with this Number Line Pack!

In the Pack:

- pp. 3-4 Small Number Lines – cut and connect (color)
- pp. 5-6 Small Number Lines – cut and connect (blackline)
- p. 7 Activities with the Number Line & Cards
- pp. 8-9 0-30 Number Cards (print onto colored paper)
- pp. 10-12 Number Concept Worksheets (before, after, between)

www.thisreadingmama.com

Terms of Use: This printable pack was created for you to use at home with your child(ren)/student(s) or with multiple children in *your* classroom or tutoring setting. Please *do not* share between classroom teachers, sell, host, reproduce, giveaway, or store on any other site (including a blog, Facebook, 4Shared, Dropbox, Amazon Inspire, etc.). Thank you!

You'll Also LOVE...

We have LOTS of freebies for counting & number sense!
Check them all out [HERE](#).

COUNTING & NUMBER SENSE



0 1 2 3 4 5 6 7 8 9 10



©www.thisreadingmama.com

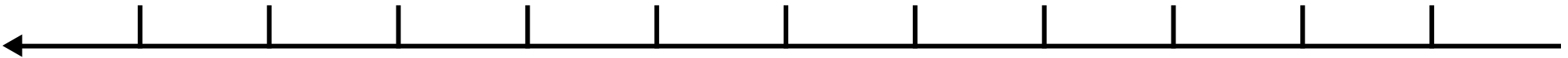
11 12 13 14 15 16 17 18 19 20



21 22 23 24 25 26 27 28 29 30



0 1 2 3 4 5 6 7 8 9 10



©www.thisreadingmama.com

11 12 13 14 15 16 17 18 19 20



21 22 23 24 25 26 27 28 29 30



0

1

2

3

4

5

©www.thisreadingmama.com

6

7

8

9

10

11

12

13

14

15

16

17

18

19

20

21

22

23

24

25

26

27

28

29

30

0 1 2 3 4 5 6 7 8 9 10



©www.thisreadingmama.com

11 12 13 14 15 16 17 18 19 20



21 22 23 24 25 26 27 28 29 30



0 1 2 3 4 5 6 7 8 9 10



©www.thisreadingmama.com

11 12 13 14 15 16 17 18 19 20



21 22 23 24 25 26 27 28 29 30



0

1

2

3

4

5

©www.thisreadingmama.com

6

7

8

9

10

11

12

13

14

15

16

17

18

19

20

21

22

23

24

25

26

27

28

29

30

Activities with the Number Line & Cards

-Lay the number cards on the floor to make a “living” number line. Learners can hop to numbers.

-Hide number cards around the room. Learners find and build the number line on the floor.

Draw one number card and answer:

-What number comes AFTER this number?

-What number comes BEFORE this number?

Draw two number cards:

-Find the two numbers on the number line; put a marker on each number.

-Which of your number is greater?

-Which of your number is the least?

-Say all the numbers that come BETWEEN your two numbers.

-Write a number that comes BETWEEN these two numbers.

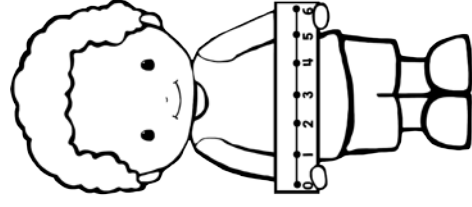
Draw one number card and play:

-What’s my number?

Version 1: Learners ask “yes” or “no” questions to figure out the number.

Version 2: You give clues such as, “My number is between 5 and 10. It is an odd number. It is greater than 6 but less than 8.

-Two players can play “War” with cards. Give each player their own set of 0-30 cards. Place them in facedown piles. Learners draw the top card and compare the numbers. Whoever has the greater number gets to keep them both. You could also play whoever has the least number keeps them both.



Number Cards (0-30)

0

www.thisreadingmama.com

1

www.thisreadingmama.com

2

www.thisreadingmama.com

3

www.thisreadingmama.com

4

www.thisreadingmama.com

5

www.thisreadingmama.com

6

www.thisreadingmama.com

7

www.thisreadingmama.com

8

www.thisreadingmama.com

9

www.thisreadingmama.com

10

www.thisreadingmama.com

11

www.thisreadingmama.com

12

www.thisreadingmama.com

13

www.thisreadingmama.com

14

www.thisreadingmama.com

15

www.thisreadingmama.com

16

www.thisreadingmama.com

17

www.thisreadingmama.com

18

www.thisreadingmama.com

19

www.thisreadingmama.com

Number Cards (0-30)

20

www.thisreadingmama.com

21

www.thisreadingmama.com

22

www.thisreadingmama.com

23

www.thisreadingmama.com

24

www.thisreadingmama.com

25

www.thisreadingmama.com

26

www.thisreadingmama.com

27

www.thisreadingmama.com

28


www.thisreadingmama.com

29

www.thisreadingmama.com


30

www.thisreadingmama.com



Write the number that comes BEFORE each number.

_____ 10	_____ 6	_____ 24
_____ 22	_____ 13	_____ 19
_____ 4	_____ 27	_____ 11
_____ 15	_____ 1	_____ 8
_____ 20	_____ 18	_____ 3
_____ 9	_____ 30	_____ 16



Write the number that comes AFTER each number.

21 _____

9 _____

15 _____

14 _____

29 _____

2 _____

25 _____

18 _____

23 _____

0 _____

11 _____

26 _____

22 _____

6 _____

19 _____

12 _____

21 _____

7 _____



Write the numbers that come BETWEEN.

10 ___ ___ 13

15 ___ ___ 18

23 ___ ___ 26

2 ___ ___ 5

19 ___ ___ 22

26 ___ ___ 29

16 ___ ___ 19

7 ___ ___ 10

7 ___ ___ 10

14 ___ ___ 17

20 ___ ___ 23

0 ___ ___ 3

Let's Connect!



 subscriber
FREEBIES



The easiest way to connect is to
[SUBSCRIBE TO MY NEWSLETTER.](#)

You'll get access to my HUGE library of exclusive freebies!

Blog: www.thisreadingmama.com

TpT: [/This-Reading-Mama](https://www.teacherspayteachers.com/This-Reading-Mama)

Facebook: [/thisreadingmama](https://www.facebook.com/thisreadingmama)

Pinterest: [/thisreadingmama](https://www.pinterest.com/thisreadingmama)

Twitter: [@thisreadingmama](https://twitter.com/thisreadingmama)

Email me: becky@thisreadingmama.com

Clip art & fonts by:

